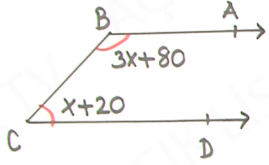


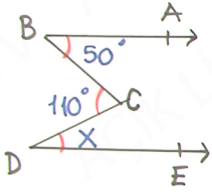
1

Örnek



$AB \parallel CD$   
Verilenlere göre  
 $m(\widehat{BCD}) = ?$

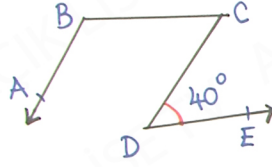
örnek



$X = ?$

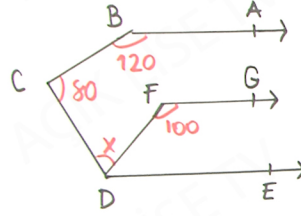
2

Örnek



$BC \parallel DE$   
 $AB \parallel DC$   
 $m(\widehat{ABC}) = ?$

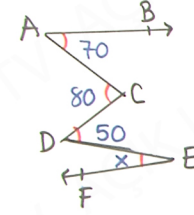
örnek



$AB \parallel FG \parallel DE$  ise  $X = ?$

3

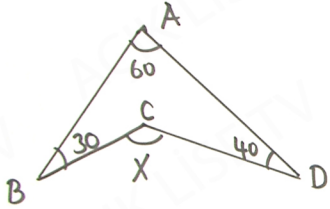
Örnek



$AB \parallel FE$   
ise  $X = ?$

4

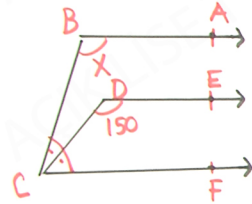
örnek



$X = ?$

5

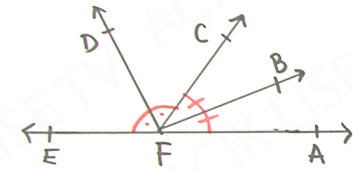
örnek



$AB \parallel DE \parallel CF$   
 $X$  kaçtır?

6

örnek



Verilenlere göre  
 $m(\widehat{DFB})$  Kaç derecedir?